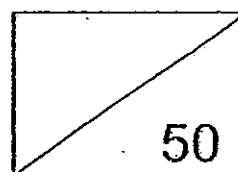


Red Swastika School
Primary 1
Review Test 2
Mathematics



Name: _____ () Date : 1 November 2012

Class: _____ Parent's Sign: _____

Duration: 1 hour

Section A: 10 marks (2 marks each)


Choose the correct answer and write its number in the brackets provided.

1) 64 is 10 more than _____.

- 1) 74
- 2) 63
- 3) 54
- 4) 44

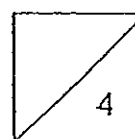
()

2) The picture below shows _____.

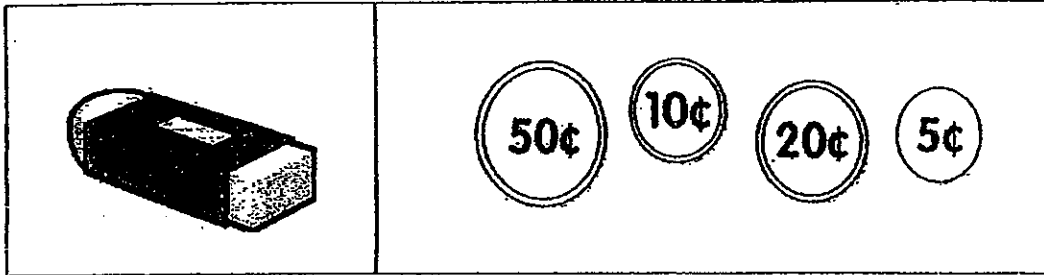


- 1) 2 groups of 3
- 2) 2 groups of 2
- 3) 4 groups of 2
- 4) 4 groups of 4

()



- 3) Ahmad paid for an eraser with the amount of coins shown below:



How much did Ahmad pay for the eraser?

- 1) 55 cents
- 2) 65 cents
- 3) 85 cents
- 4) 95 cents

()

- 4) Adding 7 tens 7 ones to 8 ones gives _____.

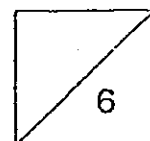
- 1) 15
- 2) 22
- 3) 77
- 4) 85

()

- 5) Ben has 2 ten-dollar notes. He can exchange them for _____ five-dollar notes.

- 1) 20
- 2) 15
- 3) 5
- 4) 4

()



Section B: 24 marks (2 marks each)

Work out the following sums. Show all your workings and write the answers in the spaces provided.

6) Look at the numbers below and fill in the blanks.

72

51


68

47

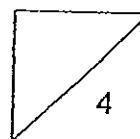
a) The smallest number is _____

b) _____ is greater than 68 but less than 86.

7) Circle the ladybirds into groups of 3.



There are _____ groups of ladybirds.



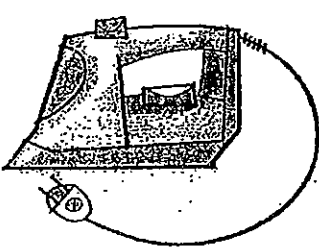
8) Look at the number pattern below.

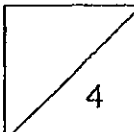
2	A	6	8	B
---	----------	---	---	----------

a) The number in Box A is _____

b) The number in Box B is _____

9) Mrs Chan bought the iron as shown in the picture below.
Shade the exact amount of money she had to pay the cashier.

 \$33	\$10	\$10	\$10
	\$5	\$2	\$2
		\$1	\$1



10)


$$\text{Smiley Face} = 34$$

$$25 + \text{Smiley Face} = \text{Triangle}$$

$$\text{Triangle} + \text{Smiley Face} = \boxed{?}$$

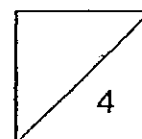
The missing number in the box is _____

11)



a) There are _____ tens and _____ ones.

b) There are _____ rulers altogether.



- 12) Oranges are sold at 3 for \$1. If Mrs Tan paid \$5, how many oranges did she buy?



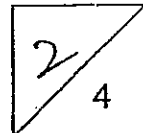
3 for \$1

Ans : _____

- 13) There are 16 chairs.




The chairs can be arranged in _____ rows of 4 chairs each.



- 14) May went to the bookshop with 1 one-dollar coin. She spent all her money buying some stationery as shown in the picture below. What is the most number of items May can buy?




pen
80 cents



ruler
25 cents




notebook
40 cents




sharpener
35 cents

Ans : _____


- 15) Mr Tan went to a shop to buy the following items.



Item A
\$39



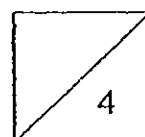
Item B
\$65



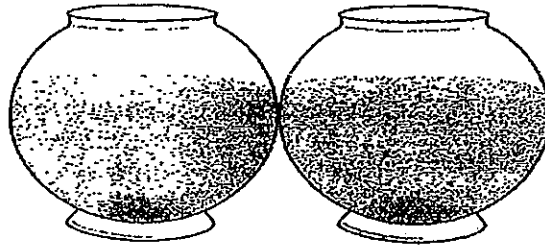
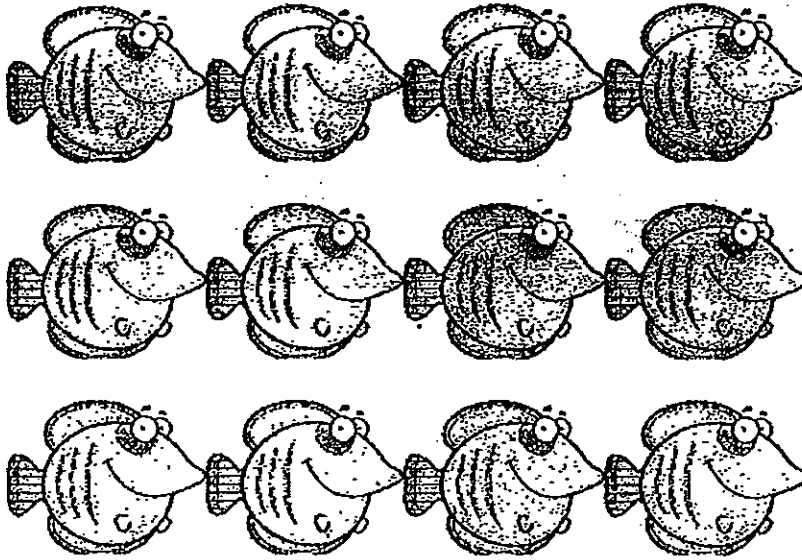
Item C
\$25

- a) If he had spent \$64, he had bought Item _____
and Item _____

- b) Item B costs \$ _____ more than Item C.

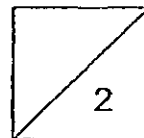


- 16) The fish below are put equally into 2 fish bowls.



A fish died in each fish bowl.

There are _____ fish in each fish bowl now.



- 17) Samy wants to buy the soccer ball shown in the picture below.
He has 3 ten-dollar notes and 3 five-dollar notes in his wallet.

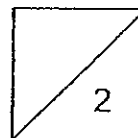


Price: \$45

Circle the correct answer.

Does Samy have enough money to buy the soccer ball?

(Yes , No)



Section C : 16 marks (4 marks each)

Do the following sums. Show your workings and statements clearly.

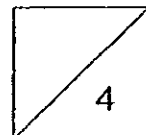
18) Henry had some marbles. He gave 49 marbles to his brother and 25 marbles to his sister. He then had 16 marbles left.

a) How many marbles did Henry give away?

Henry gave away _____ marbles.

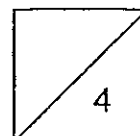
b) How many marbles did Henry have at first?

Henry had _____ marbles at first.



- 19) A ferry had 80 seats. 55 seats were taken up.
How many seats were empty?

_____ seats were empty.



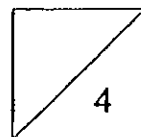
20) Samy is 6 years old. His cousin, John, is 3 times as old as he.

a) How old is John?

John is _____ years old .

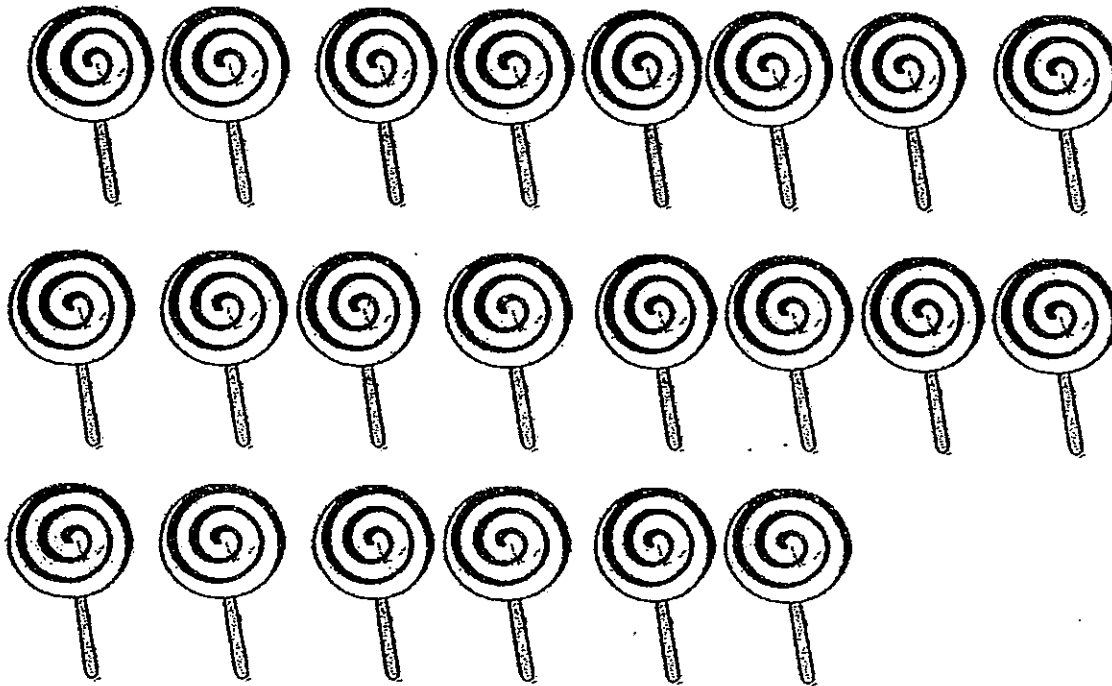
b) How old will John be next year?

John will be _____ years old next year.



21. Siew Ling had 23 lollipops. She gave 5 lollipops to each friend.

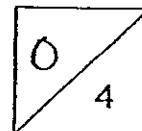
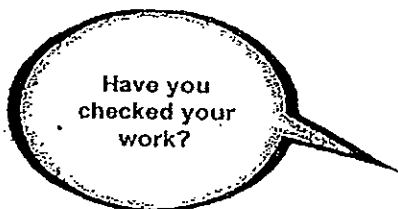
- a) How many friends did she give the lollipops to?
(show your working by **grouping** the lollipops.)



She gave the lollipops to _____ friends.

- b) How many lollipops were not given out?

_____ lollipops were not given out.



Answer Ke

EXAM PAPER 2012

SCHOOL : RED SWASTIKA SCHOOL

SUBJECT : PRIMARY 1 - MATHEMATICS

TERM : REVIEW TEST 2

SECTION A

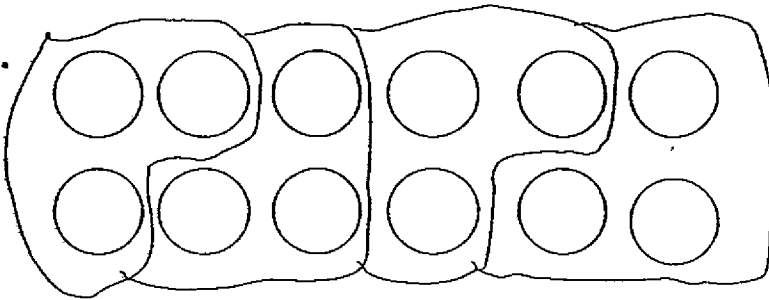
Q1	Q2	Q3	Q4	Q5
3	3	3	4	4

SECTION B

6. a) 47

b) 72

7.

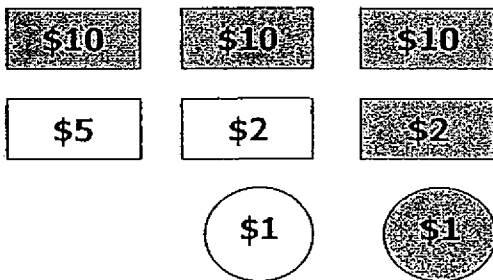


There are 4 groups of ladybirds.

8. a) 4

b) 10

9.



10. 93

11. a) 4, 6
b) 46

12. 15

13. 4

14. 3

15. a) C, A
b) \$40

16. 5

17. Yes

SECTION C

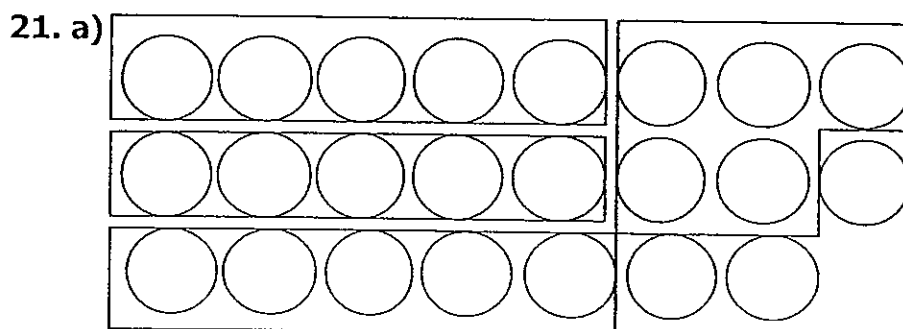
18. a) $25 + 49 = 74$
Henry gave away 74 marbles.

- b) $74 + 16 = 90$
Henry had 90 marbles at first.

19. $80 - 55 = 25$
25 seats were empty.

20. a) $6 \times 3 = 18$
John is 18 years old.

- b) $18 + 1 = 19$
John will be 19 years old next year.



She gave the lollipops to 4 friends.

- b) $23 - 20 = 3$
3 lollipops were not given out.